



Please write clearly in block capitals.

Centre number

--	--	--	--	--

Candidate number

--	--	--	--

Surname

Forename(s)

Candidate signature

AS CHEMISTRY

Paper 1 Inorganic and Physical Chemistry

Monday 20 May 2019

Morning

Time allowed: 1 hour 30 minutes

Materials

For this paper you must have:

- the Periodic Table/Data Sheet, provided as an insert (enclosed)
- a ruler with millimetre measurements
- a scientific calculator, which you are expected to use where appropriate.

Instructions

- Use black ink or black ball-point pen.
- Fill in the boxes at the top of this page.
- Answer **all** questions.
- You must answer the questions in the spaces provided. Do **not** write outside the box around each page or on blank pages.
- All working must be shown.
- Do all rough work in this book. Cross through any work you do not want to be marked.

Information

- The marks for questions are shown in brackets.
- The maximum mark for this paper is 80.

Advice

You are advised to spend about 65 minutes on **Section A** and 25 minutes on **Section B**.

For Examiner's Use	
Question	Mark
1	
2	
3	
4	
5	
6	
7	
8	
Section B	
TOTAL	



J U N 1 9 7 4 0 4 1 0 1

IB/G/Jun19/E10

7404/1

There are no questions printed on this page

*Do not write
outside the
box*

**DO NOT WRITE ON THIS PAGE
ANSWER IN THE SPACES PROVIDED**



0 2

Section A

Answer **all** questions in this section.

0 1

This question is about compounds that contain fluorine.

0 1 . 1

Sodium fluoride contains sodium ions (Na^+) and fluoride ions (F^-).
 Na^+ and F^- have the same electron configuration.

Explain why a fluoride ion is larger than a sodium ion.

[2 marks]

0 1 . 2

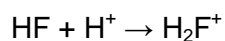
Explain, in terms of structure and bonding, why the melting point of sodium fluoride is high.

[2 marks]

Question 1 continues on the next page

Turn over ►

0 1 . 3 The ion H_2F^+ is formed when hydrogen fluoride gains a proton as shown in the equation



Name the type of bond formed when HF reacts with H^+
Explain how this bond is formed.

[2 marks]

Type of bond _____

Explanation _____

0 1 . 4 Fluoroantimonic acid contains two ions, SbF_6^- and H_2F^+

Draw the shape of the SbF_6^- ion and the shape of the H_2F^+ ion. Include any lone pairs that influence the shape.

Name the shape of each ion.

[4 marks]

	SbF_6^-	H_2F^+
Shape		
Name of shape		



0 1 . 5 Hydrogen fluoride reacts with ethyne (C_2H_2) as shown in the equation. All compounds are in the gaseous state.

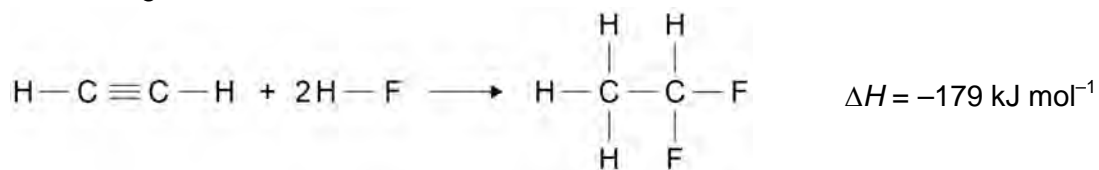


Table 1 shows some mean bond enthalpy data.

Table 1

Bond	C-H	C≡C	H-F	C-C
Mean bond enthalpy / kJ mol^{-1}	412	837	562	348

Use the data in **Table 1** to calculate a value for the bond enthalpy of a C-F bond in the product.

[3 marks]

C-F bond enthalpy _____ kJ mol^{-1}

Turn over for the next question

Turn over ►

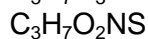
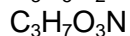
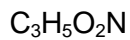


0 2

Time of flight (TOF) mass spectrometry is an important analytical technique.

A mixture of three compounds is analysed using a TOF mass spectrometer.
The mixture is ionised using electrospray ionisation.

The three compounds are known to have the molecular formulas:

**0 2 . 1**

Describe how the molecules are ionised using electrospray ionisation.

[3 marks]

0 2 . 2

Give the formula of the ion that reaches the detector first in the TOF mass spectrometer.

[1 mark]

0 2 . 3

A sample of germanium is analysed in a TOF mass spectrometer using electron impact ionisation.

Give an equation, including state symbols, for the process that occurs during the ionisation of a germanium atom.

[1 mark]



0 2 . 4

In the TOF mass spectrometer, a germanium ion reaches the detector in 4.654×10^{-6} s
The kinetic energy of this ion is 2.438×10^{-15} J
The length of the flight tube is 96.00 cm

The kinetic energy of an ion is given by the equation $KE = \frac{1}{2}mv^2$

where

m = mass / kg

v = speed / ms^{-1}

The Avogadro constant $L = 6.022 \times 10^{23} \text{ mol}^{-1}$

Use this information to calculate the mass, in g, of one mole of these germanium ions.
Use your answer to state the mass number of this germanium ion.

[5 marks]

Mass of one mole of germanium ions _____ g

Mass number of ion _____

10

Turn over for the next question

Turn over ►



0 3 This question is about chromium and its compounds.

0 3 . 1 Complete the full electron configuration of a chromium atom.

[1 mark]

1s² _____

0 3 . 2 An atom has 2 more protons and 3 more neutrons than an atom of ⁵²Cr.

Deduce the symbol, including the mass number and the atomic number, for this atom.

[1 mark]

0 3 . 3 A sample of chromium contains four isotopes and has a relative atomic mass of 52.09

Table 2 shows the mass number and the percentage abundance of three of these isotopes.

Table 2

Mass number	52	53	54
Abundance (%)	82.8	10.9	2.7

Determine the percentage abundance of the fourth isotope.
Show by calculation that the mass number of this isotope is 50

[3 marks]

Percentage abundance _____

Calculation



0 3 . 4 Deduce the oxidation state of chromium in the $\text{Cr}_2\text{O}_7^{2-}$ ion.

[1 mark]

0 3 . 5 Iodide ions can be oxidised to iodine using $\text{Cr}_2\text{O}_7^{2-}$ ions.

Deduce a half-equation to show the oxidation of iodide ions to iodine.

State symbols are **not** required.

[1 mark]

0 3 . 6 Deduce a half-equation for the conversion in acidic solution of $\text{Cr}_2\text{O}_7^{2-}$ ions to Cr^{3+} ions.

State symbols are **not** required.

[1 mark]

0 3 . 7 Use your answers from questions **03.5** and **03.6** to deduce the overall redox equation for the reaction between iodide ions and acidified $\text{Cr}_2\text{O}_7^{2-}$ ions.

State symbols are **not** required.

[1 mark]

9

Turn over for the next question

Turn over ►



0 **4**

The first ionisation energies of the elements in Period 2 change as the atomic number increases.

Explain the pattern in the first ionisation energies of the elements from lithium to neon.

[6 marks]

*Do not write
outside the
box*



*Do not write
outside the
box*

Lined writing area with 25 horizontal lines.

6

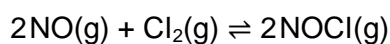
Turn over for the next question

Turn over ►



0 5

Nitrogen monoxide reacts with chlorine to form nitrosyl chloride (NOCl).

**0 5 . 1**

1.50 mol of NO are mixed with 1.00 mol of Cl₂ and the mixture is left to reach equilibrium at a given temperature.

The equilibrium mixture contains 0.350 mol of NOCl

Calculate the amount, in moles, of NO and of Cl₂ in the equilibrium mixture.

[2 marks]

Amount of NO _____ mol

Amount of Cl₂ _____ mol

0 5 . 2

Give the expression for the equilibrium constant, K_c , for the reaction between nitrogen monoxide and chlorine to form nitrosyl chloride.

[1 mark]

$K_c =$



Do not write
outside the
box

0 5 . 3

A different equilibrium mixture is prepared in a flask of volume 800 cm^3 at a different temperature.

At equilibrium this mixture contains 0.850 mol of NO and 0.458 mol of Cl_2

For the reaction at this temperature $K_c = 1.32 \times 10^{-2} \text{ mol}^{-1} \text{ dm}^3$

Determine the amount, in moles, of NOCl in this equilibrium mixture.

[4 marks]

Amount of NOCl _____ mol

7

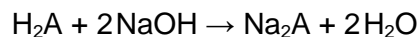
Turn over for the next question

Turn over ►



0 6

A student does an investigation to determine the relative formula mass, M_r , of a solid unknown diprotic acid, H_2A



- 250 cm³ of aqueous solution are prepared using 1300 mg of H_2A
- A pipette is used to add 25.0 cm³ of 0.112 mol dm⁻³ aqueous sodium hydroxide to a conical flask.
- This aqueous sodium hydroxide is titrated with the acid solution.

The titration results are shown in **Table 3**.

Table 3

	Rough	1	2	3
Final volume / cm³	27.35	26.75	38.90	35.70
Initial volume / cm³	0.00	0.35	12.15	9.20
Titre / cm³	27.35	26.40	26.75	26.50

0 6 . 1

Use the results to calculate the M_r of H_2A

[5 marks]

M_r of H_2A _____



0 6 . 2 The uncertainty in using the pipette in this experiment is $\pm 0.06 \text{ cm}^3$

Calculate the percentage uncertainty in using the pipette.

[1 mark]

% uncertainty _____

0 6 . 3 Before adding the solution from the burette in the rough titration, there was an air bubble below the tap.
At the end of this titration the air bubble was not there.

Explain why this air bubble increases the final burette reading of the rough titration.

[1 mark]

0 6 . 4 During the titration the student washed the inside of the conical flask with some distilled water.

Suggest why this washing does **not** give an incorrect result.

[1 mark]

8

Turn over for the next question

Turn over ►



0 7

This question is about the reactions of magnesium and its compounds.

0 7 . 1

Magnesium is used in one of the stages in the extraction of titanium.

Give an equation for the reaction between titanium(IV) chloride and magnesium.
State the role of magnesium in this reaction.

[2 marks]

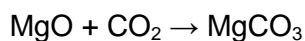
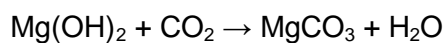
Equation

Role of magnesium

0 7 . 2

A mixture of magnesium oxide and magnesium hydroxide has a mass of 3200 mg

This mixture is reacted with carbon dioxide to form magnesium carbonate and water.
The mass of water produced is 210 mg



Calculate the percentage by mass of magnesium oxide in this mixture.

[4 marks]

% of magnesium oxide

6

0 8

The following pairs of compounds, each in aqueous solution, can be distinguished by simple test-tube reactions.

Give a reagent, or combination of reagents, that can be added to the solutions in each pair to distinguish between them in a single reaction.

State what is observed in each case.

0 8**1**

NaCl(aq) and BaCl₂(aq)

[3 marks]

Reagent _____

Observation with NaCl _____

Observation with BaCl₂ _____

0 8**2**

NaCl(aq) and Na₂CO₃(aq)

[3 marks]

Reagent _____

Observation with NaCl _____

Observation with Na₂CO₃ _____

6

Turn over for Section B

Turn over ►

Section B

Do not write
outside the
boxAnswer **all** questions in this section.Only **one** answer per question is allowed.

For each answer completely fill in the circle alongside the appropriate answer.

CORRECT METHOD



WRONG METHODS



If you want to change your answer you must cross out your original answer as shown.



If you wish to return to an answer previously crossed out, ring the answer you now wish to select as shown.

You may do your working in the blank space around each question but this will not be marked.
Do **not** use additional sheets for this working.

0 9

Which sample, measured at room temperature and pressure, contains the greatest number of the stated particles?

[1 mark]

A 1 g of hydrogen molecules

B 1 g of helium atoms

C 1 dm³ of hydrogen moleculesD 1 dm³ of helium atoms

1 0

5.0 g of an oxide of molybdenum contain 4.0 g of molybdenum.

What is the empirical formula of this oxide?

[1 mark]

A MoO₂B Mo₄O₅C Mo₂O₃D Mo₃O₂

1 1

Which substance has delocalised electrons?

[1 mark]

A graphite

B iodine

C sodium chloride

D tetrachloromethane

1 2

Which species is **not** pyramidal in shape?

[1 mark]

A PF_3 B H_3O^+ C CH_3^- D BF_3

1 3

Which change occurs when water is vaporised?

[1 mark]

A An exothermic change occurs.

B Covalent bonds are broken.

C Intermolecular forces are overcome.

D The total energy of the molecules decreases.

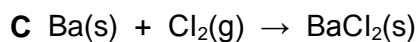
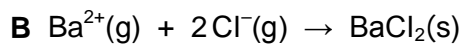
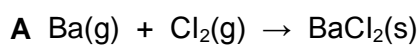
Turn over ►



1 4

Which equation represents the reaction that has a standard enthalpy change equal to the standard enthalpy of formation for barium chloride?

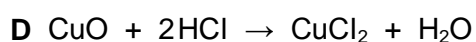
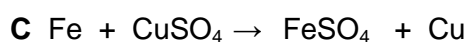
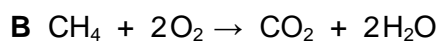
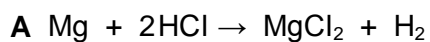
[1 mark]



1 5

Which equation does **not** represent a redox reaction?

[1 mark]



1 6

Which property would you expect the element radium, Ra, to possess?

[1 mark]

A It forms a soluble sulfate.

B It does not react with water.

C It is a good conductor of electricity.

D It forms a covalent fluoride.



1 7

Which statement is **not** correct?

[1 mark]

- A Strontium has a lower first ionisation energy than calcium.
- B Strontium has a larger ionic radius than calcium.
- C Strontium reacts less vigorously with water than calcium.
- D Strontium hydroxide is more soluble in water than calcium hydroxide.

1 8

Which property of the Group 2 elements, Ca to Ba, increases with increasing atomic number?

[1 mark]

- A Atomic Radius
- B Electronegativity
- C First ionisation energy
- D Melting Point

1 9

What is the best oxidising agent?

[1 mark]

- A F_2
- B F^-
- C I_2
- D I^-

Turn over ►



2 0

Some fuel in a spirit burner is burned, and the heat produced is used to heat a container of water.

In this experiment:

The mass of water heated = m g

The temperature rise = y °C

The specific heat capacity of water = c J K⁻¹ g⁻¹

What is the amount of heat energy absorbed by the water?

[1 mark]

A mcy

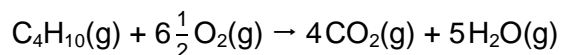
B $mc(y + 273)$

C y / mc

D $(y + 273) / mc$

2 1

The equation below represents the complete combustion of butane.



20 cm³ of butane are completely burned in 0.20 dm³ of oxygen.
Which statement is correct?

All volumes are measured at the same temperature and pressure.

[1 mark]

A 40 cm³ of carbon dioxide are formed

B 0.065 dm³ of oxygen react

C 70 cm³ of oxygen remain

D 0.50 dm³ of steam are formed



2	2
---	---

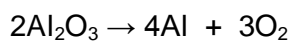
Which statement is correct about reactions involving halide ions?

[1 mark]

- A** Sodium chloride forms chlorine when added to concentrated sulfuric acid.
- B** Sodium chloride forms chlorine when added to bromine.
- C** Sodium bromide forms bromine when added to concentrated sulfuric acid.
- D** Sodium bromide forms bromine when added to iodine.

2	3
---	---

What is the percentage yield when 20 g of aluminium are produced from 50 g of aluminium oxide?



[1 mark]

- A** 76%
- B** 40%
- C** 33%
- D** 19%

15

END OF QUESTIONS



There are no questions printed on this page

*Do not write
outside the
box*

**DO NOT WRITE ON THIS PAGE
ANSWER IN THE SPACES PROVIDED**

Copyright information

For confidentiality purposes, from the November 2015 examination series, acknowledgements of third-party copyright material will be published in a separate booklet rather than including them on the examination paper or support materials. This booklet is published after each examination series and is available for free download from www.aqa.org.uk after the live examination series.

Permission to reproduce all copyright material has been applied for. In some cases, efforts to contact copyright-holders may have been unsuccessful and AQA will be happy to rectify any omissions of acknowledgements. If you have any queries please contact the Copyright Team, AQA, Stag Hill House, Guildford, GU2 7XJ.

Copyright © 2019 AQA and its licensors. All rights reserved.



2 4



1 9 6 A 7 4 0 4 / 1

IB/G/Jun19/7404/1